

Monday 25 June 2012 – Afternoon

A2 GCE MATHEMATICS

4731 Mechanics 4

QUESTION PAPER

Candidates answer on the Printed Answer Book.

OCR supplied materials:

- Printed Answer Book 4731
- List of Formulae (MF1)

Other materials required:

- Scientific or graphical calculator

Duration: 1 hour 30 minutes



INSTRUCTIONS TO CANDIDATES

These instructions are the same on the Printed Answer Book and the Question Paper.

- The Question Paper will be found in the centre of the Printed Answer Book.
- Write your name, centre number and candidate number in the spaces provided on the Printed Answer Book. Please write clearly and in capital letters.
- **Write your answer to each question in the space provided in the Printed Answer Book.** Additional paper may be used if necessary but you must clearly show your candidate number, centre number and question number(s).
- Use black ink. HB pencil may be used for graphs and diagrams only.
- Answer **all** the questions.
- Read each question carefully. Make sure you know what you have to do before starting your answer.
- Do **not** write in the bar codes.
- You are permitted to use a scientific or graphical calculator in this paper.
- Give non-exact numerical answers correct to 3 significant figures unless a different degree of accuracy is specified in the question or is clearly appropriate.
- The acceleration due to gravity is denoted by $g \text{ m s}^{-2}$. Unless otherwise instructed, when a numerical value is needed, use $g = 9.8$.

INFORMATION FOR CANDIDATES

- This information is the same on the Printed Answer Book and the Question Paper.
- The number of marks is given in brackets [] at the end of each question or part question on the Question Paper.
- **You are reminded of the need for clear presentation in your answers.**
- The total number of marks for this paper is **72**.
- The Printed Answer Book consists of **12** pages. The Question Paper consists of **4** pages. Any blank pages are indicated.

INSTRUCTION TO EXAMS OFFICER/INVIGILATOR

- Do not send this Question Paper for marking; it should be retained in the centre or recycled. Please contact OCR Copyright should you wish to re-use this document.

- 1 A uniform square lamina, of mass 4.5 kg and side 0.6 m, is rotating about a fixed vertical axis which is perpendicular to the lamina and passes through its centre. A stationary particle becomes attached to the lamina at one of its corners, and this causes the angular speed of the lamina to change instantaneously from 2.2 rad s^{-1} to 1.5 rad s^{-1} .

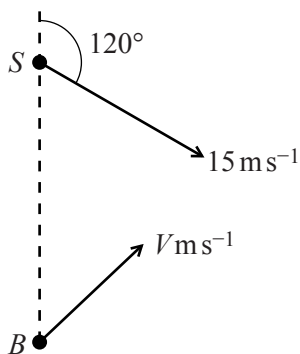
(i) Find the mass of the particle. [4]

The lamina then slows down with constant angular deceleration. It turns through 36 radians as its angular speed reduces from 1.5 rad s^{-1} to zero.

(ii) Find the time taken for the lamina to come to rest. [2]

- 2 A uniform solid of revolution is formed by rotating the region bounded by the x -axis and the curve $y = x \left(1 - \frac{x^2}{a^2} \right)$ for $0 \leq x \leq a$, where a is a constant, about the x -axis. Find the x -coordinate of the centre of mass of this solid. [7]

3



A ship S is travelling with constant velocity 15 m s^{-1} on a course with bearing 120° . A patrol boat B observes the ship when S is due north of B . The patrol boat B then moves with constant speed $V \text{ m s}^{-1}$ in a straight line (see diagram).

(i) Given that $V = 18$, find the bearing of the course of B such that B intercepts S . [3]

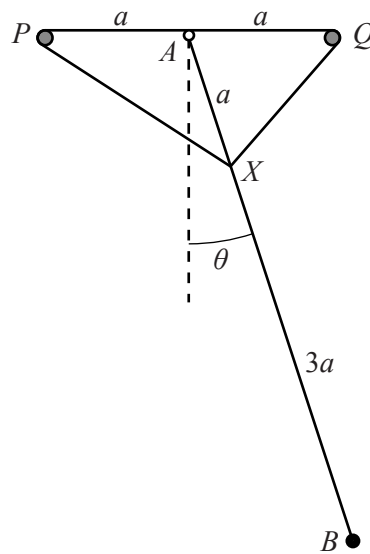
(ii) Given instead that $V = 9$, find the bearing of the course of B such that B passes as close as possible to S . [5]

(iii) Find the smallest value of V for which it is possible for B to intercept S . [2]

- 4 A uniform lamina of mass 18 kg occupies the region bounded by the x -axis, the y -axis, the line $x = \ln 9$ and the curve $y = e^{\frac{1}{2}x}$ for $0 \leq x \leq \ln 9$. The unit of length is the metre. Find the moment of inertia of this lamina about the x -axis. [7]

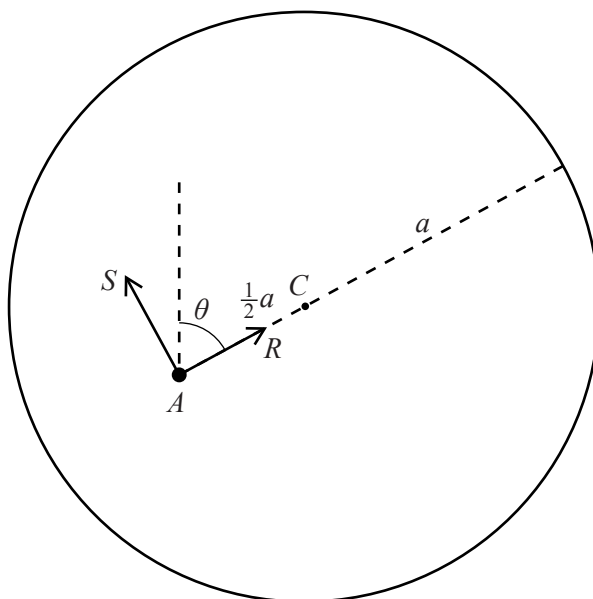
- 5 A uniform rod of mass 4 kg and length 2.4 m can rotate in a vertical plane about a fixed horizontal axis through one end of the rod. The rod is released from rest in a horizontal position and a frictional couple of constant moment 20 N m opposes the motion.
- (i) Find the angular acceleration of the rod immediately after it is released. [4]
- (ii) Find the angle that the rod makes with the horizontal when its angular acceleration is zero. [3]
- (iii) Find the maximum angular speed of the rod. [5]
- (iv) The rod first comes to instantaneous rest after rotating through an angle θ radians from its initial position. Find an equation for θ , and verify that $2.0 < \theta < 2.1$. [3]

6



Two small smooth pegs P and Q are fixed at a distance $2a$ apart on the same horizontal level, and A is the mid-point of PQ . A light rod AB of length $4a$ is freely pivoted at A and can rotate in the vertical plane containing PQ , with B below the level of PQ . A particle of mass m is attached to the rod at B . A light elastic string, of natural length $2a$ and modulus of elasticity λ , passes round the pegs P and Q and its two ends are attached to the rod at the point X , where $AX = a$. The angle between the rod and the downward vertical is θ , where $-\frac{1}{2}\pi < \theta < \frac{1}{2}\pi$ (see diagram). You are given that the elastic energy stored in the string is $\lambda a(1 + \cos \theta)$.

- (i) Show that $\theta = 0$ is a position of equilibrium, and show that the equilibrium is stable if $\lambda < 4mg$. [6]
- (ii) Given that $\lambda = 3mg$, show that $\ddot{\theta} = -k\frac{g}{a}\sin \theta$, stating the value of the constant k . Hence find the approximate period of small oscillations of the system about the equilibrium position $\theta = 0$. [6]



A uniform circular disc with centre C has mass m and radius a . The disc is free to rotate in a vertical plane about a fixed horizontal axis passing through a point A on the disc, where $AC = \frac{1}{2}a$. The disc is slightly disturbed from rest in the position with C vertically above A . When AC makes an angle θ with the upward vertical the force exerted by the axis on the disc has components R parallel to AC and S perpendicular to AC (see diagram).

- (i) Show that the angular speed of the disc is $\sqrt{\frac{4g(1 - \cos \theta)}{3a}}$. [4]
- (ii) Find the angular acceleration of the disc, in terms of a , g and θ . [2]
- (iii) Find R and S , in terms of m , g and θ . [6]
- (iv) Find the magnitude of the force exerted by the axis on the disc at an instant when $R = 0$. [3]

Copyright Information

OCR is committed to seeking permission to reproduce all third-party content that it uses in its assessment materials. OCR has attempted to identify and contact all copyright holders whose work is used in this paper. To avoid the issue of disclosure of answer-related information to candidates, all copyright acknowledgements are reproduced in the OCR Copyright Acknowledgements Booklet. This is produced for each series of examinations and is freely available to download from our public website (www.ocr.org.uk) after the live examination series.

If OCR has unwittingly failed to correctly acknowledge or clear any third-party content in this assessment material, OCR will be happy to correct its mistake at the earliest possible opportunity.

For queries or further information please contact the Copyright Team, First Floor, 9 Hills Road, Cambridge CB2 1GE.

OCR is part of the Cambridge Assessment Group; Cambridge Assessment is the brand name of University of Cambridge Local Examinations Syndicate (UCLES), which is itself a department of the University of Cambridge.